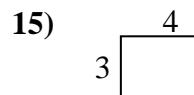
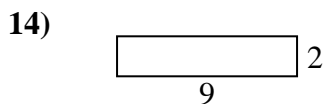
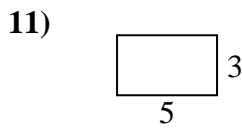
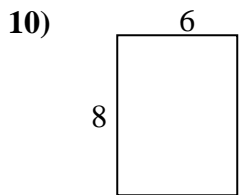
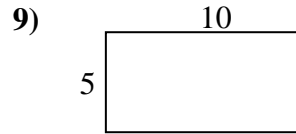

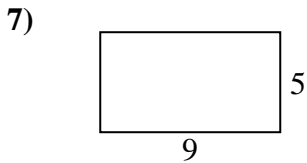
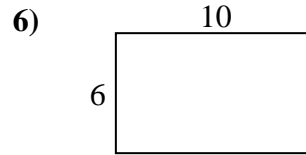
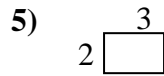
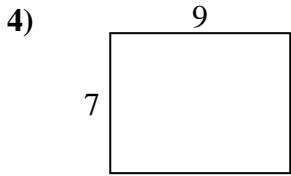
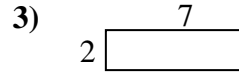
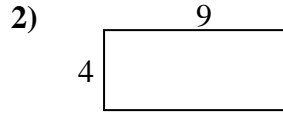
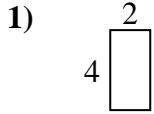




Find the perimeter and area of each figure. Each figure is in centimeters (cm). Not to scale.

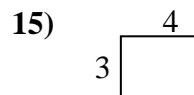
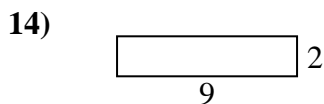
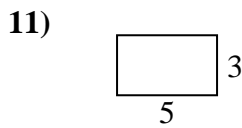
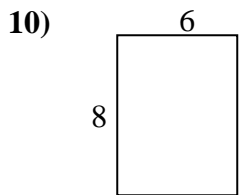
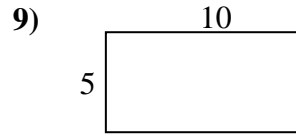

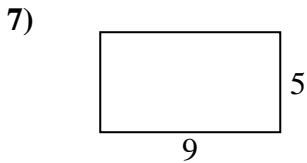
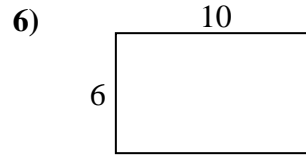
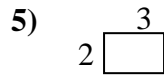
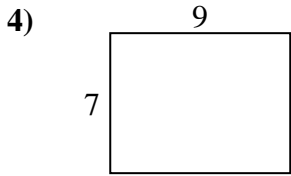
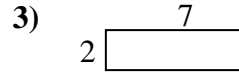
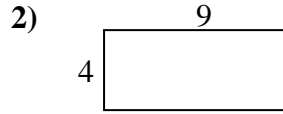
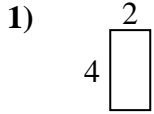


Answers

1. \_\_\_\_\_
2. \_\_\_\_\_
3. \_\_\_\_\_
4. \_\_\_\_\_
5. \_\_\_\_\_
6. \_\_\_\_\_
7. \_\_\_\_\_
8. \_\_\_\_\_
9. \_\_\_\_\_
10. \_\_\_\_\_
11. \_\_\_\_\_
12. \_\_\_\_\_
13. \_\_\_\_\_
14. \_\_\_\_\_
15. \_\_\_\_\_



Find the perimeter and area of each figure. Each figure is in centimeters (cm). Not to scale.



Answers

1.	<u>12</u>	<u>8</u>
2.	<u>26</u>	<u>36</u>
3.	<u>18</u>	<u>14</u>
4.	<u>32</u>	<u>63</u>
5.	<u>10</u>	<u>6</u>
6.	<u>32</u>	<u>60</u>
7.	<u>28</u>	<u>45</u>
8.	<u>24</u>	<u>20</u>
9.	<u>30</u>	<u>50</u>
10.	<u>28</u>	<u>48</u>
11.	<u>16</u>	<u>15</u>
12.	<u>24</u>	<u>32</u>
13.	<u>20</u>	<u>24</u>
14.	<u>22</u>	<u>18</u>
15.	<u>14</u>	<u>12</u>